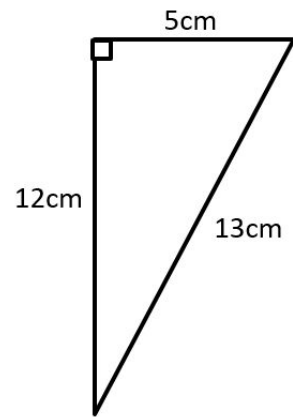
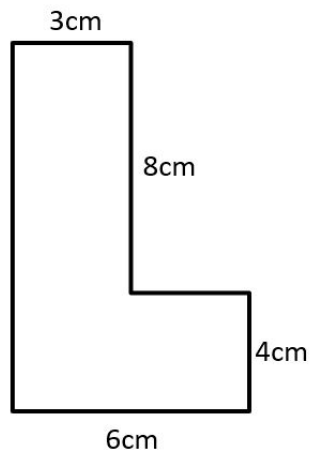
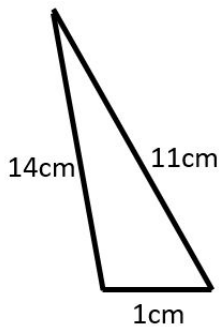
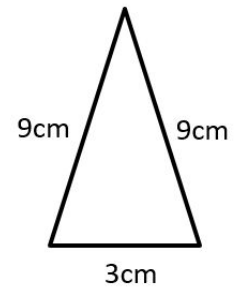
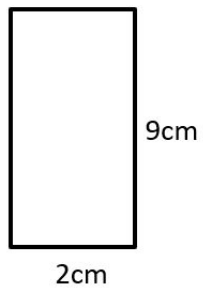
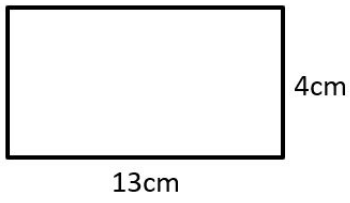


Red

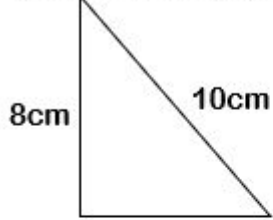


1. 34cm
2. 22cm
3. 21cm
4. 26cm
5. 36cm
6. 30cm

Yellow

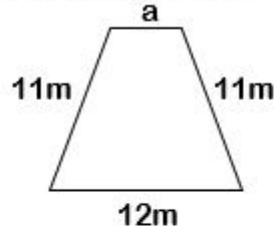
Work out the missing lengths using the given perimeter

1. Perimeter = 24cm

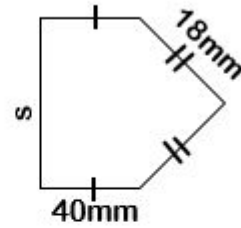


m

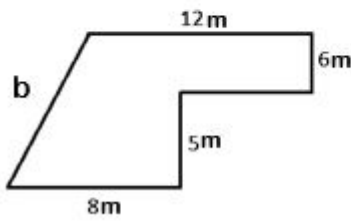
2. Perimeter = 40m



3. Perimeter = 132mm

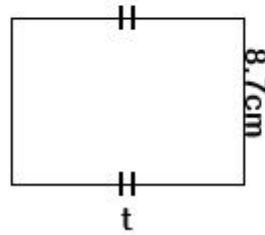


4. Perimeter = 50m

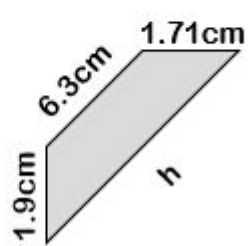


8.7cm

5. Perimeter = 22cm



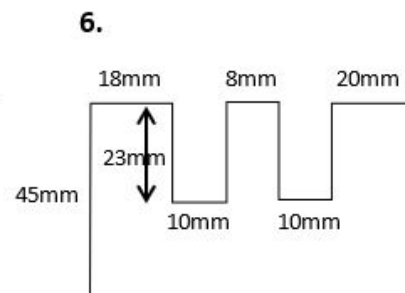
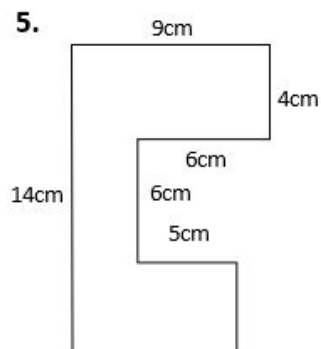
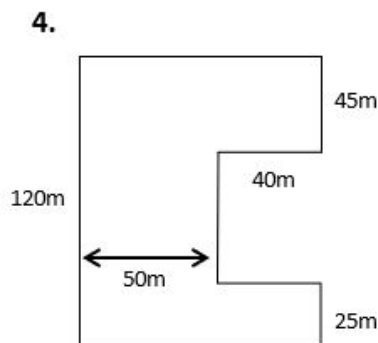
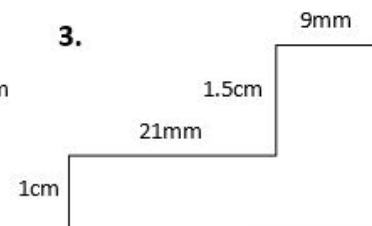
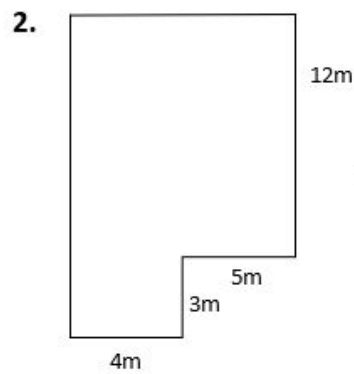
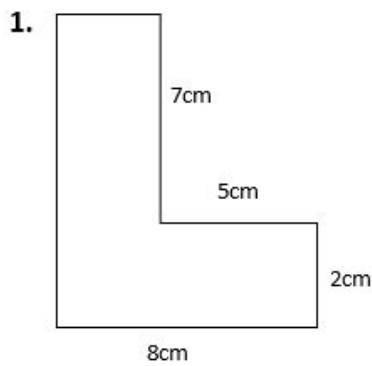
6. Perimeter = 17cm



1. 6cm
2. 6m
3. 16mm
4. 11m
5. 2.3cm
6. 7.09cm

Green

Find the perimeter of each of these shapes. Write in missing lengths that you calculate.



1. 34 cm perimeter (9cm)
2. 48m perimeter (9m and 15m)
3. 11cm perimeter (2.5cm and 3cm)
4. 500m perimeter (90m and 50m)
5. 56cm perimeter (4cm and 8m)
6. 314mm perimeter (46mm)