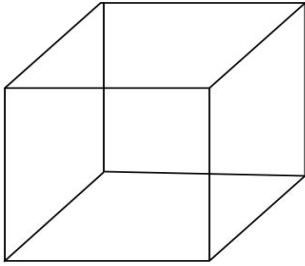


## Year 5 Week 8 Lesson 3 QUESTIONS

Can I classify 3D shapes?

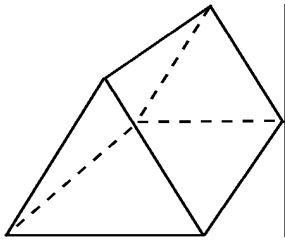
**RED**

1. What is this shape and what are its properties?



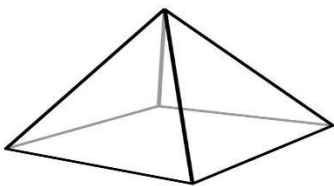
- 1.
- 2.
- 3.
- 4.

2. What is this shape and what are its properties?



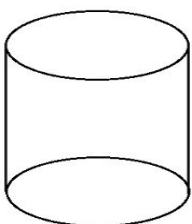
- 1.
- 2.
- 3.
- 4.

3. What is this shape and what are its properties?




- 1.
- 2.
- 3.
- 4.

4. What is this shape and what are its properties?



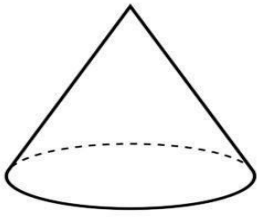
- 1.
- 2.
- 3.
- 4.

5. What is this shape and what are its properties?



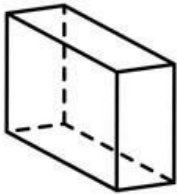
1.
2.
3.
4.

6. What is this shape and what are its properties?



1.
2.
3.
4.

7. What is this shape and what are its properties?

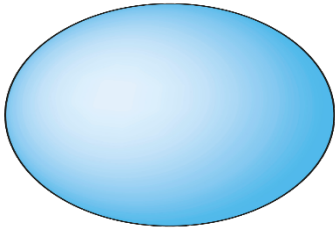


1.
2.
3.
4.

Find 3D shapes around your home. Can you find any that you can classify? Please send a picture to us of any you find.

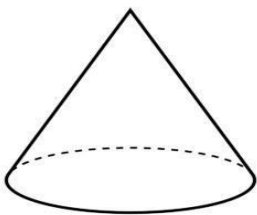
**YELLOW**

1. What is the name and what are the properties of this 3D shape?



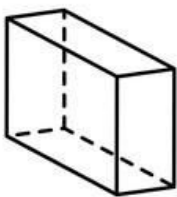
1.
2.
3.
4.

2. What is this shape and what are its properties?



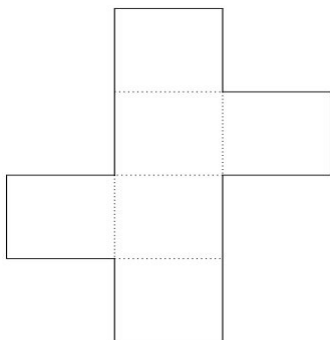
1.
2.
3.
4.

3. What is this shape and what are its properties?



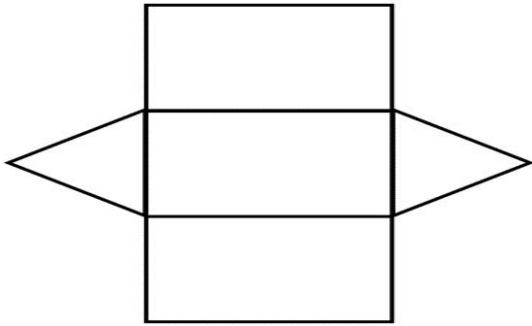
1.
2.
3.
4.

4. This net makes a 3D shape. What shape does it make and what are its properties?



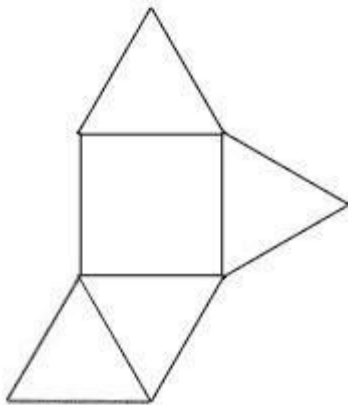
1.
2.
3.
4.

5. This net makes a 3D shape. What shape does it make and what are its properties?



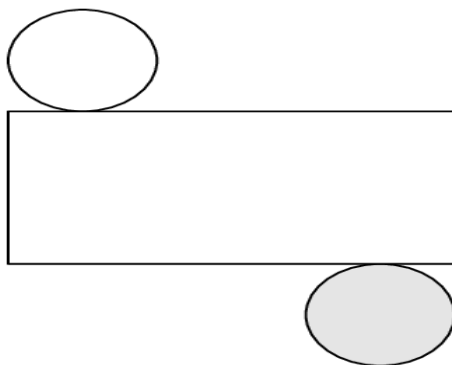
1.
2.
3.
4.

6. This net makes a 3D shape. What shape does it make and what are its properties?



1.
2.
3.
4.

7. This net makes a shape. What shape does it make and what are its properties?

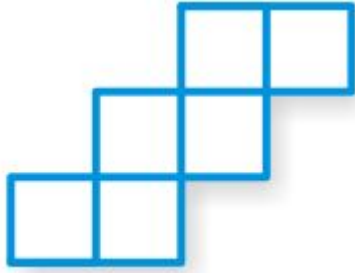


1.
2.
3.
4.

8. Find 3D shapes around your home. Can you find any that you can classify?  
Please send a picture to us of any you find.

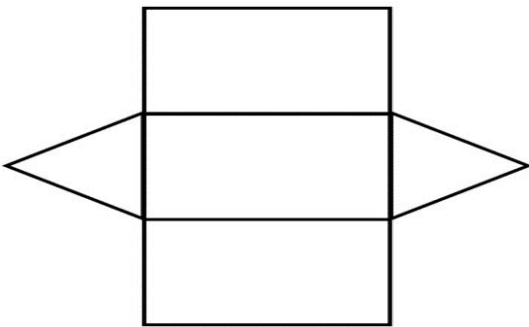
**GREEN**

1. This net makes a 3D shape. What shape does it make and what are its properties?



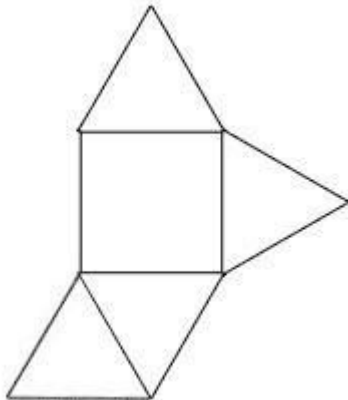
1.
2.
3.
4.

2. This net makes a 3D shape. What shape does it make and what are its properties?



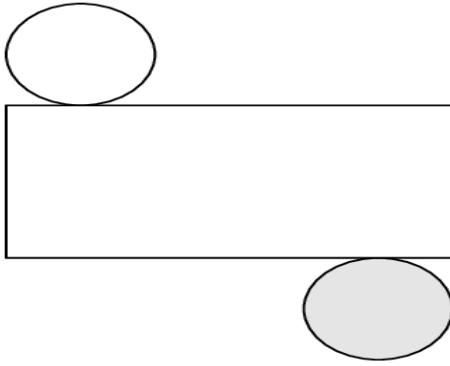
1.
2.
3.
4.

3. This net makes a 3D shape. What shape does it make and what are its properties?



1.
2.
3.
4.

4. This net makes a shape. What shape does it make and what are its properties?



1.
2.
3.
4.

5. What shape am I?  
I have 1 face.  
I have no edges and no vertices.
6. What shape am I?  
I have 6 faces (all rectangles).  
I have 12 edges.  
I have 8 vertices.
7. What shape am I?  
I have 2 faces, 1 of which is a circle.  
I have 1 edge.  
I have 1 vertex
8. Find 3D shapes around your home. Can you find any that you can classify?  
Please send a picture to us of any you find.