

RED

Copy the correct shape with the right description. Then write the name of the shape.


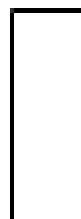
I have 1 curved side
and no corners.

I have 3 sides and 3 corners.


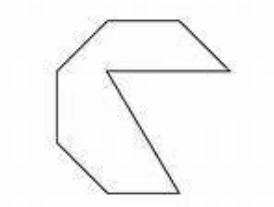

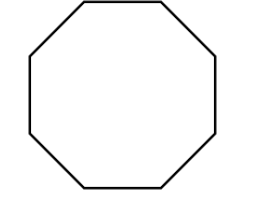
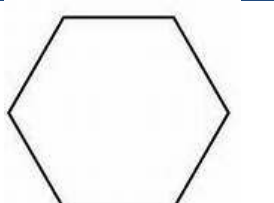
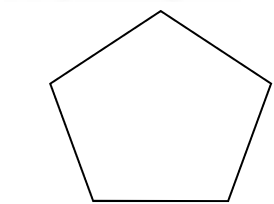
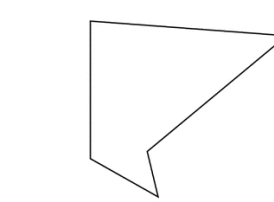
I have 4 equal sides and 4
corners.

I have 4 sides. 2 are long
and 2 are short.


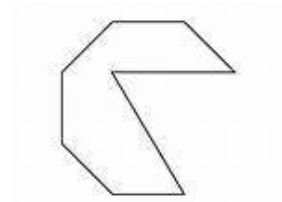
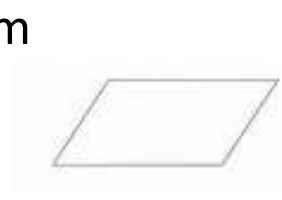
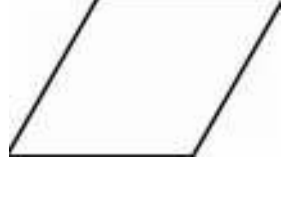

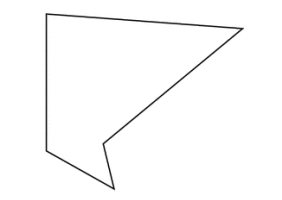
I have 5 sides and 5
corners.



YELLOW

I have four sides and four corners. All my sides are equal.	rectangle	
I have five sides and five corners. My sides are NOT all equal.	irregular octagon	
I have four sides and four corners. I have 2 long sides and 2 short sides.	square	
I have eight sides and eight corners. My sides are NOT all equal.	Octagon	
I eight sides and eight corners. My sides are all equal,	Hexagon	
I have six sides and six corners. All my sides are equal.	Pentagon	
I have five sides and five corners. All my sides are the same size.	Irregular pentagon	

GREEN

I have four sides. I have two long sides and two shorter sides. I two obtuse angles and two acute angles. I have two pairs of parallel sides.	rectangle	
I have five sides. My sides are NOT all the same size and my angles are NOT all the same size.	irregular octagon	
I have four sides. I have two longer sides and two shorter sides. I have no parallel sides.	parallelogram	
I have eight sides. My sides are NOT all the same size and my angles are NOT all the same size.	rhombus	
I four sides. My sides are all the same size. I have no right angles. I have two pairs of parallel lines.	kite	
I have four sides. I have two long sides and two shorter sides. I have four right angles. I have two pairs of parallel lines.	irregular pentagon	
I have four sides. I have a long sides, a short side and two sides the same. I have no right angles. I only have one pair of parallel lines.	trapezium	