


RED


Copy the correct shape with the right description. Then write the name of the shape.



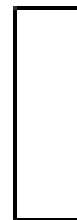
Circle I have 1 curved side and no corners.



Triangle I have 3 sides and 3 corners.



Square I have 4 equal sides and 4 corners.


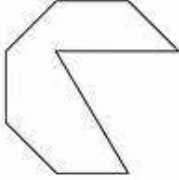

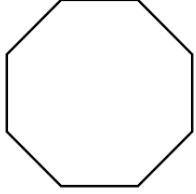
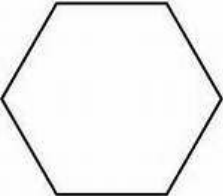
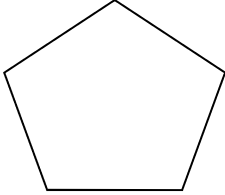
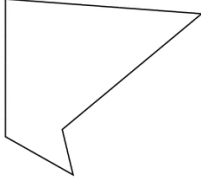


Rectangle I have 4 sides. 2 are long and 2 are short.





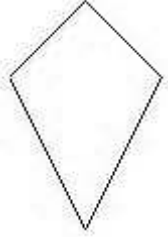



Pentagon
I have 5 sides and 5 corners.

YELLOW

<p>I have four sides and four corners. All my sides are equal.</p>	rectangle		
<p>I have five sides and five corners. My sides are NOT all equal.</p>	irregular octagon		
<p>I have four sides and four corners. I have 2 long sides and 2 short sides.</p>	square		
<p>I have eight sides and eight corners. My sides are NOT all equal.</p>	Octagon		
<p>I eight sides and eight corners. My sides are all equal,</p>	Hexagon		
<p>I have six sides and six corners. All my sides are equal.</p>	Pentagon		
<p>I have five sides and five corners. All my sides are the same size.</p>	Irregular pentagon		

GREEN

<p>I have four sides. I have two long sides and two shorter sides. I two obtuse angles and two acute angles. I have two pairs of parallel sides.</p>	<p>rectangle</p> 
<p>I have five sides. My sides are NOT all the same size and my angles are NOT all the same size.</p>	<p>irregular octagon</p> 
<p>I have four sides. I have two longer sides and two shorter sides. I have no parallel sides.</p>	<p>parallelogram</p> 
<p>I have eight sides. My sides are NOT all the same size and my angles are NOT all the same size.</p>	<p>rhombus</p> 
<p>I four sides. My sides are all the same size. I have no right angles. I have two pairs of parallel lines.</p>	<p>kite</p> 
<p>I have four sides. I have two long sides and two shorter sides. I have four right angles. I have two pairs of parallel lines.</p>	<p>irregular pentagon</p> 
<p>I have four sides. I have a long sides, a short side and two sides the same. I have no right angles. I only have one pair of parallel lines.</p>	<p>trapezium</p> 