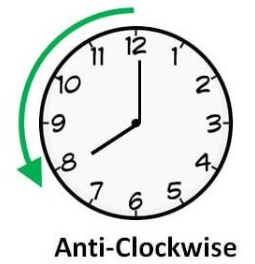
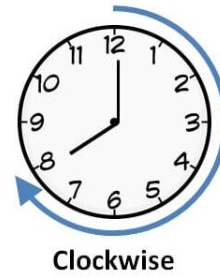



Red Tasks:

Can you figure out which way these images are facing after being turned in right angles?




1. Which way is this image facing after turning 1 right angle clockwise?




a



b




c




d



2. Which way is this image facing after turning 2 right angles anti-clockwise?




a




b



c



d



3. Which way is this image facing after turning 3 right angles clockwise?



a



b



c



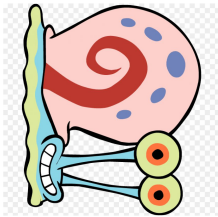
d



4. Which way is this image facing after turning 3 right angles anti-clockwise?



a



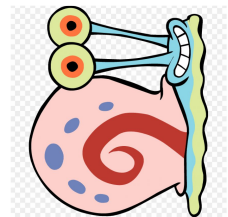
b




c




d




5. Which way is this image facing after turning 4 right angles clockwise?




a



b




c




d




6. Which way is this image facing after turning 2 right angles clockwise?




a




b



c




d




Yellow task

Can you figure out which way these images are facing after being turned in right angles?




Clockwise



Anti-Clockwise


1. Which way is this image facing after turning 3 right angles clockwise?




a



b




c




d



2. Which way is this image facing after turning 2 right angles anti-clockwise and one angle clockwise?



a




b



c



d



3. Which way is this image facing after turning 3 right angles clockwise and one angle anti-clockwise?



a



b



c



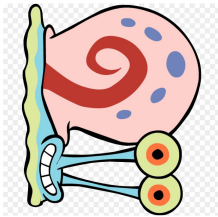
d



4. Which way is this image facing after turning 5 right angles anti-clockwise?



a



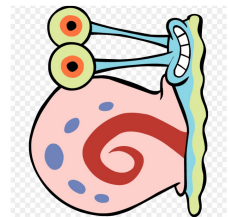
b




c




d




5. Which way is this image facing after turning 6 right angles clockwise?




a



b




c




d




6. Which way is this image facing after turning 2 right angles clockwise and 4 anti-clockwise?




a




b



c




d




Green task:


1. Which way is this image facing after turning 6 right angles clockwise?




a




b




c




d




2. Which way is this image facing after turning 2 right angles clockwise and 4 anti-clockwise?




a




b



c



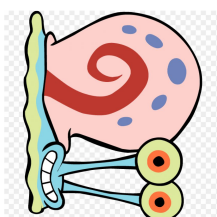
d



3. Which way is this image facing after turning 7 right angles anti-clockwise?



a



b



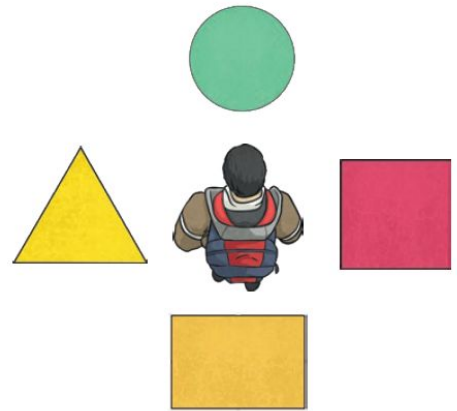
c



d



4. The boy is facing the circle. He turns 3 right angles clockwise and 4 right angles anti-clockwise. Which shape does he end up facing? **Triangle**



5. Write instructions on how the boy can turn to face the square. You must include a clockwise turn and an anti-clockwise turn. **Turn 1 right angle anti-clockwise and 2 right angles clockwise OR turn 2 right angles anti-clockwise and 3 right angles clockwise. Or any other answer where they have made two turns to end up at the square**

6. You are facing North East (NE). If you turned 5 right angles anti-clockwise, and three angles clockwise, which direction would you be facing? **South west (SW)**

