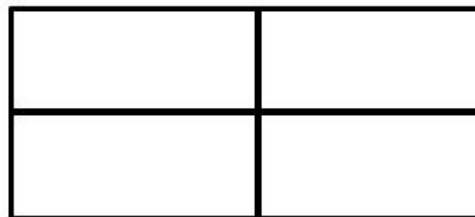




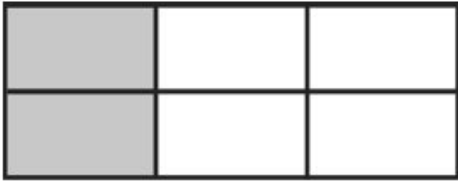


**Red Task:** Label the fraction on the left. Colour in and label the equivalent fraction on the right

Fraction

Equivalent fraction



**Yellow Task: Write the equivalent fractions**

1

$$\frac{1}{2} = \frac{\square}{4}$$

2

$$\frac{1}{3} = \frac{\square}{12}$$

3

$$\frac{1}{4} = \frac{\square}{16}$$

4

$$\frac{2}{5} = \frac{\square}{20}$$

5

$$\frac{3}{\square} = \frac{6}{10}$$

6

$$\frac{1}{8} = \frac{2}{\square}$$

**Green Task:** Write three equivalent fractions to each of these fractions.

1

$$\frac{1}{2} =$$

2

$$\frac{1}{3} =$$

3

$$\frac{1}{4} =$$

4

$$\frac{2}{5} =$$

5

$$\frac{5}{6} =$$

6

$$\frac{11}{12} =$$