


**Red Task:** Label the fraction on the left. Colour in and label the equivalent fraction on the right

Fraction

Equivalent fraction


$2/6$



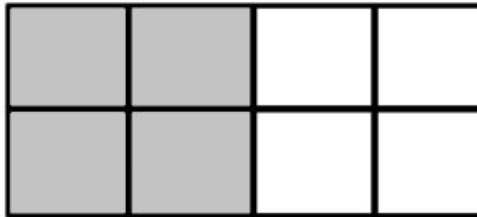
$1/3$




$2/4$



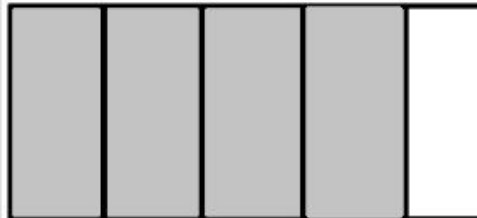
$4/8$




$8/10$




$4/5$




$4/6$




$2/3$



$6/8$



$3/4$



**Yellow Task: Write the equivalent fractions**

1) 4	2)
3) 4	4) 8
5) 5	6) 16

**Green Task: Write three equivalent fractions to each of these fractions.**

1 $\frac{2}{4}$ $\frac{3}{6}$ $\frac{4}{8}$ $\frac{5}{10}$	2 $\frac{2}{6}$ $\frac{3}{9}$ $\frac{4}{12}$ $\frac{5}{15}$
3 $\frac{2}{8}$ $\frac{3}{12}$ $\frac{4}{16}$ $\frac{5}{20}$	4 $\frac{4}{10}$ $\frac{6}{15}$ $\frac{8}{20}$ $\frac{10}{25}$
5 $\frac{10}{12}$ $\frac{15}{18}$ $\frac{20}{24}$ $\frac{25}{30}$	6 $\frac{22}{24}$ $\frac{33}{36}$ $\frac{44}{48}$ $\frac{55}{60}$