










































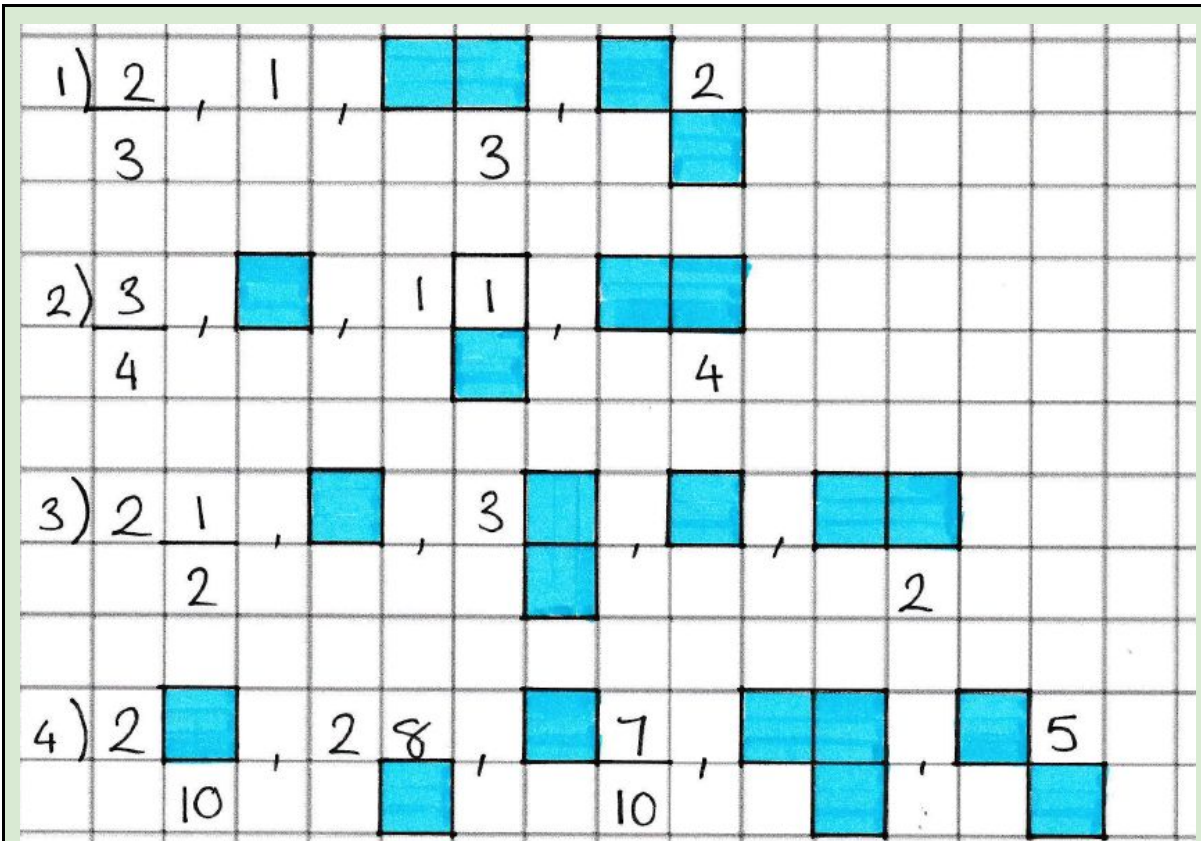
### Red Challenges

1) 1,  or 	2)  , 3, 1 or 
2, 2	4, 4, 
3)  , 2, 3 or 	4) 4,  ,  , 7
 , 3, 	 , 10, 10, 
5) 1, 3, 2, 	6)  or  , 9, 
4,  , 	10,  , 10

### Yellow Challenges

1) 2, 3,  or 	2)  , 7,  , 
 , 4, 	10,  ,  , 10
3)  ,  , 1	4) 3, 1, 1,  ,  2
3, 3	4, 4, 4
5) 8,  , 1, 1, 	6) 2, 2,  , 3,  1
 , 10, 	 , 3,  2

### Green challenges



5) On my number line, I start at 1.



I move forward 4 spaces, backwards two spaces and forwards 3 more spaces. I land on  $1 \frac{4}{6}$ .

**Do you agree with this statement? Explain your reasoning.**

6)



Ahmed

I start on  $1 \frac{6}{8}$ . Then, I count back  $\frac{4}{8}$ . After, I count on  $\frac{2}{8}$ . I will end on 2.

Ahmed has made an error.

Use a number line and reasoning to explain what the answer should be.

---



---



---



---

