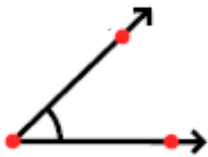


Lesson 1 Can I identify angles?

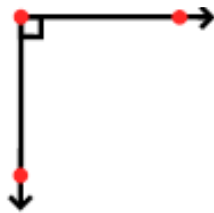
Red

Name each angle as acute, right or obtuse

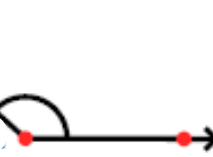
1.



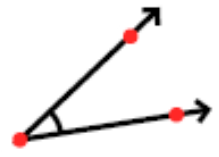
2.



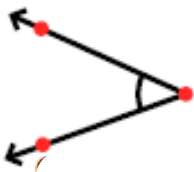
3.



4.



5.



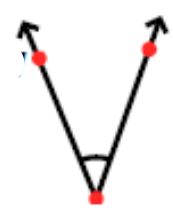
6.



7.



8.

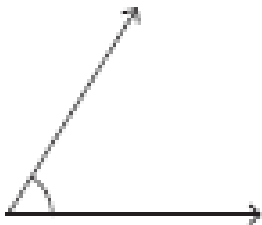


Lesson 1 Can I identify angles?

Yellow

Name each angle as acute, right , obtuse, straight or reflex

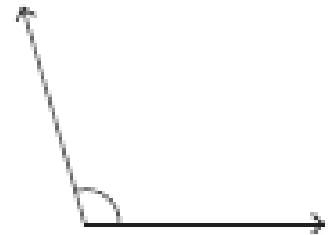
1)



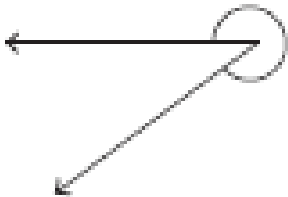
2)



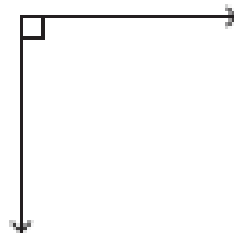
3)




4)




5)



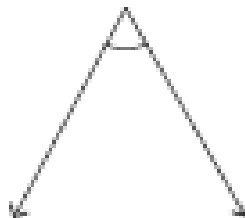
6)



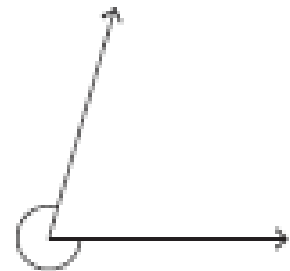
7)



8)



9)



Lesson 1 Can I identify angles?

Green

For each angle in the shapes, label it as follows:

\square = right, a = acute, o = obtuse, x = reflex.

