

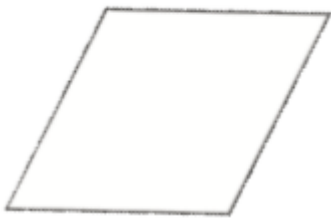
2d shapes Year 3 and 4: Activities

Name the 2d shapes:

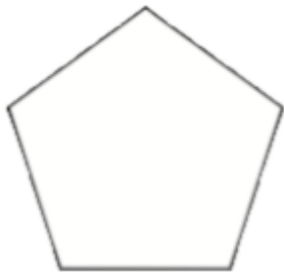
1.



2.



3.



4.



5.

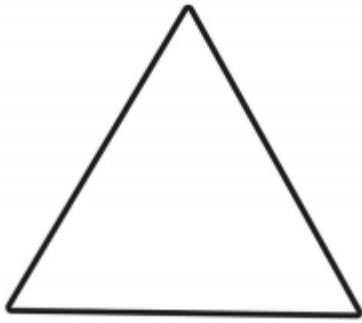


6.



What are the properties of these shapes? (sides, angles, lines of symmetry)

1.



2.



3.




4.



How many lines of symmetry do these shapes have?

1.



2.

